


Name _____

Date _____

End of Year Assessment

1. Circle whether each clock is an analog or digital clock.



Digital

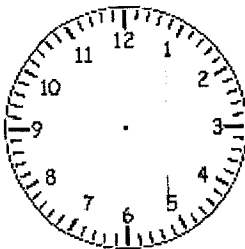
Analog



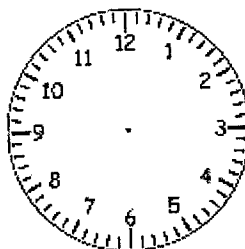
Digital

Analog

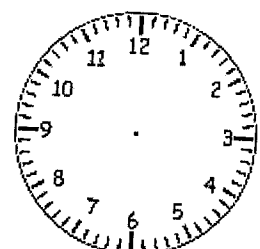
2. Put hands on the clock to show the time.



8:00



3:30



1:15

3. What time is on each clock?







4. How many seconds are in a minute? _____

5. How many minutes are in an hour? _____

6. Are there more minutes or hours in one day? _____